

# Read PDF Geometry Chapter 4 Test Form A Answers

## **Geometry Chapter 4 Test Form A Answers**

If you ally infatuation such a referred **geometry chapter 4 test form a answers** book that will have enough money you worth, get the categorically best seller from us currently from several preferred authors. If you desire to witty books, lots of novels, tale, jokes, and more fictions collections are afterward launched, from best seller to one of the most current released.

# Read PDF Geometry Chapter 4 Test Form A Answers

You may not be perplexed to enjoy all ebook collections geometry chapter 4 test form a answers that we will unconditionally offer. It is not regarding the costs. It's more or less what you habit currently. This geometry chapter 4 test form a answers, as one of the most effective sellers here will utterly be accompanied by the best options to review.

~~Chapter 4 Test Review - Geometry~~  
~~Chapter 4 Practice Test (Triangles with~~  
~~Proofs)~~ *Chapter 4 Study Guide - Triangles*  
*\u0026 Congruency* **Geometry - Chapter 4 Review**  
**(Congruent Triangles)** geometry chapter 4

# Read PDF Geometry Chapter 4 Test Form A Answers

review *Geometry Review For Test on Congruent  
Triangles Ch 4* ~~4 CP Geometry Chapter 4 Review~~

---

Chapter 4 Practice Quiz (Sections 4.1 - 4.4)

**Essential Mathematics: Chapter 4 Practice**

**Test Form A Part I Geometry Exam Review**

**Chapter 4** *9th Geometry | Chapter 4*







*Construction of Triangles | Lecture 1 by*

*Rahul Sir | Maharashtra Board TN 9th Maths*

Geometry Exercise 4.1Q.No.1 Geometry Chapter

4 Congruent Triangles AlexMaths ~~How to score~~

~~good Marks in Maths | How to Score 100/100 in~~

~~Maths |      ~~

**Geometry Introduction** ~~Geometry Proofs for~~

# Read PDF Geometry Chapter 4 Test Form A Answers

~~Triangles Geometry Proofs Explained! Triangle  
Congruence~~ Geometry Unit 4 Test Review

## **Triangle Congruence - SSS, SAS, ASA and AAS 128-2.16**

---

Geometry - Chapter 3 test review Geometry - 4  
- Proving Triangles Congruent *Construction of  
triangles 4.3 Class 09 Understanding Geometry*

| MathHelp.com Q 1 - Ex 4.1 - Basic

*Geometrical Ideas - Chapter 4 - Class 6th*

NCERT Maths Introduction - \"Practical

Geometry\" Chapter 4 - NCERT Class 8th Maths

Solutions 6 CP Geometry Chapter 4 Review b Q

1 - Ex 4.1 - Practical Geometry - NCERT Maths

Class 8th - Chapter 4 Q 1 - Ex 4.3 -

# Read PDF Geometry Chapter 4 Test Form A Answers

*Practical Geometry - NCERT Maths Class 8th -  
Chapter 4 ~~Chapter 4 Quiz Review~~*

---

Q 1 - Ex 4.2 - Practical Geometry - NCERT  
Maths Class 8th - Chapter 4 **TN 9th Maths**

**Geometry Exercise 4.1 Q.No.2 Geometry Chapter  
4 Congruent Triangles AlexMaths**

---

Geometry Chapter 4 Test Form

Chapter 4 Geometry Test Answers Form B

Chapter 4 Test Bank Test Form C Name \_\_\_\_\_

Date Chapter 4 Class \_\_\_\_\_ Section \_\_\_\_\_

\_\_\_\_\_ A graphing calculator is needed for  
some problems. 1. Evaluate the integral:  $\int ax^2 + bx + c \, dx$ . (a)  $\frac{ax^3}{3} + \frac{bx^2}{2} + cx + d$  (b)  $\frac{ax^2}{2} + \frac{bx}{1} + c$  (c)  $\frac{ax^2}{2} + \frac{bx^2}{2} + c$  (d)  $\frac{ax^2}{2} + \frac{bx^2}{2} + c$  (e)  
None of these 2. Evaluate the integral: (a)

# Read PDF Geometry Chapter 4 Test Form A Answers

(c)  $a^2 \times b^2$  (c) ...

---

Chapter 4 Test Form B Holt Geometry -  
nsaidalliance.com

Chapter 4 Practice Test Geometry. Chapter 4  
Practice Test Geometry Multiple Choice

Identify the choice that best completes the  
statement or answers the question. \_\_\_\_\_ 1.

Use the information given in the diagram.

Tell why and A B D C a. Reflexive Property,  
Given b. Found: 7 Mar 2020 | Rating: 86/100.

Chapter 1 Test Form B - Math TV. Chapter 1

...

# Read PDF Geometry Chapter 4 Test Form A Answers

---

Chapter 4 Test Form B Geometry Answers

NAME DATE PERIOD 1 Chapter 1 Test, Form 1  
SCORE. Chapter 1 55Glencoe Geometry 1 Chapter  
1 Test, Form 1 Write the letter for the  
correct answer in the blank at the right of  
each question. 1. Name the geometric shape  
modeled by a pinhole in a wall. A line  
segment B plane C line D point For Exercises  
2-4, use the figure at the right. 2.

---

Geometry Chapter 4 Test Form 1 Answers

# Read PDF Geometry Chapter 4 Test Form A Answers

[LATEST] Chapter 4 Test Form B Geometry NAME  
DATE 4 Chapter 4 Test, Form 2A PERIOD Write  
the letter for the correct answer in the  
blank at the right of each question. 1. What  
is the slope-intercept form of the equation  
of a line with a slope of 5 Chapter 1 Test  
Form B - Math TV Schools Media Server Chapter  
1 Test Form B 1.

---

Chapter 4 Test Form B Holt Geometry  
Other Results for Chapter 4 Test Form 1A  
Answers Geometry: [www.chapter4testform1a.com](http://www.chapter4testform1a.com)  
geometry answers. methacton.org. 4 NAME



# Read PDF Geometry Chapter 4 Test Form A Answers

Chapter 4 Test, Form 2A DATE SCORE Write the letter for the correct answer in the blank at the right of each question Chapter 4 test form 1 geometry answers. 1. What is the length of the sides of this equilateral triangle?

---

Chapter 4 Test Form 1 Geometry Answers  
Chapter 4 Practice Test Geometry Multiple Choice Identify the choice that best completes the statement or answers the question. \_\_\_\_ 1. Use the information given in the diagram. Tell why and A B D C a.

# Read PDF Geometry Chapter 4 Test Form A Answers

Reflexive Property, Given b. Transitive Property, Reflexive Property c. Given, Reflexive Property d. Reflexive Property, Transitive Property .....

---

Geometry Chapter 4 Test B Answers -  
examred.com

©Glencoe/McGraw-Hill iv Glencoe Geometry  
Teacher's Guide to Using the Chapter 4  
Resource Masters The Fast FileChapter  
Resource system allows you to conveniently  
file the resources you use most often. The  
Chapter 4 Resource Mastersincludes the core

# Read PDF Geometry Chapter 4 Test Form A Answers

materials needed for Chapter 4. These materials include worksheets, extensions, and assessment options.

---

Chapter 4 Resource Masters - Math Problem Solving

Chapter 4 63Glencoe Geometry SCORE Write the letter for the correct answer in the blank at the right of each question. 1. What is the length of the sides of this equilateral triangle? A 42 C 15 B 30 D 12 2. How would  $\triangle ABC$  with vertices  $A(4, 1)$ ,  $B(2, -1)$ , and  $C(-2, -1)$  be classified based on the length

# Read PDF Geometry Chapter 4 Test Form A Answers

of its sides? F equilateral G isosceles H  
scalene J right

---

NAME DATE PERIOD 4 Chapter 4 Test, Form 2A  
SCORE

Geometry Chapter 4 Test Answer Key. geometry  
chapter 4 test answer key is available in our  
book collection an online access to it is set  
as ... [PDF] Holt Geometry Chapter 7 Test  
Form B Answers. CBSE Class 8 Practical  
Geometry Worksheet (4) ... CBSE Class 8  
Practical Geometry Worksheet (4) Worksheets  
have become an integral part of the ...

# Read PDF Geometry Chapter 4 Test Form A Answers

---

Geometry Chapter 4 Test Form A Answers

Geometry Chapter 4 Review Answers 1,2

complementary. 6 SSS, SAS, AAS, ASA, HL. 45 .  
two congruent angles. OR .  $x = 48^\circ$ ,  $y = 84^\circ$   $x = 64^\circ$ ,  $y = 64^\circ$   $x = 46^\circ$ ,  $y = 88^\circ$   $x = 68^\circ$ ,  $y =$   
13.  $w = 25^\circ$ ,  $x = 11$ ,  $y = 4$ ,  $z = 130^\circ$   $x = 10$ ,  
 $y = 15$ .  $x = 4$ ,  $y = 20$ .  $x = 22$ ,  $y = 13$ ,  $z = 3 =$   
18, = 50. ASA or AAS. none. SAS. ASA. none.  
HL or AAS. HL. AAS. none. HL. AAS. none.  
acute scalene. equilateral/equiangular

# Read PDF Geometry Chapter 4 Test Form A Answers

Geometry Chapter 4 Review Answers

Note from Mrs Geometry chapter 4 test form k answers. Renz: My hope is that my students love math as much as I do! Play, learn, and enjoy math . as you browse through this collection of my favorite third grade through high school math sites on the web Geometry chapter 4 test form k answers.

---

Geometry Chapter 4 Test Form K Answers

[LATEST] Chapter 4 Test Form B Geometry NAME  
DATE 4 Chapter 4 Test, Form 2A PERIOD Write  
the letter for the correct ariswer in the

# Read PDF Geometry Chapter 4 Test Form A Answers

blank at the right of each question. 1. What is the slope-intercept form of the equation of a line with a slope of 5 Chapter 1 Test Form B - Math TV Schools Media Server Chapter 1 Test Form B 1.

---

Geometry Chapter 4 Test Form A Answers

Geometry Chapter 4 Test Form A Answers

Author:

www.vrcworks.net-2020-10-22T00:00:00+00:01

Subject: Geometry Chapter 4 Test Form A

Answers Keywords: geometry, chapter, 4, test, form, a, answers Created Date: 10/22/2020

# Read PDF Geometry Chapter 4 Test Form A Answers

8:05:21 AM

---

Geometry Chapter 4 Test Form A Answers - VRC Works

geometry chapter 4 test form a answers is available in our digital library an online access to it is set as public so you can get it instantly. Our digital library spans in multiple countries, allowing you to get the most less latency time to download any of our books like this one. Kindly say, the geometry chapter 4 test form a answers is ...



# Read PDF Geometry Chapter 4 Test Form A Answers

---

Geometry Chapter 4 Test Form A Answers

NAME DATE PERIOD 4 Chapter 4 Test, Form 2A

SCORE Lesson 4-1 Classify Triangles by

Angles One way to classify a triangle is by the measures of its angles. • If one of the angles of a triangle is an obtuse angle, then the triangle is an obtuse triangle. • If one of the angles of a triangle is a right angle, then the triangle is a right triangle.

---

Geometry Chapter 4 Glencoe Answers

Chapter 4 64 Glencoe Geometry Chapter 4 Test,

# Read PDF Geometry Chapter 4 Test Form A Answers

Form 3 SCORE \_\_\_\_\_ 1. If  $ABC$  is isosceles,  $\angle B$  is the vertex angle,  $AB = 20x - 2$ ,  $BC = 12x + 30$ , and  $AC = 25x$ , find  $x$  and the length of each side of the triangle. 2. Find the length of the sides of the triangle with vertices  $A(0, 4)$ ,  $B(5, 4)$ , and  $C(-3, -2)$ . Classify the triangle by its sides.

---

Chapter 4 Test, Form 3 -  
d2y1pz2y630308.cloudfront.net  
Access Free Chapter Test Form G Geometry.  
Page 2/4. Access Free Chapter Test Form G  
Geometry It is coming again, the

# Read PDF Geometry Chapter 4 Test Form A Answers

supplementary addition that this site has. To unchangeable your curiosity, we manage to pay for the favorite chapter test form g geometry photo album as the another today. This is a

Copyright code :

7f7bce2b0fbb20f4aa63a8b07771ac1e